

For answers, send email to: admin@tutor-homework.com.

Include file name: Chemistry_Worksheet_0106

Price: \$3

(c) 2012 www.tutor-homework.com: Tutoring, homework help, help with online classes.

1.

Elemental iodine (I_2) is a solid at room temperature. What is the major attractive force that exists among different I_2 molecules in the solid?

Student
Response

London
dispersion
forces

dipole-
dipole
rejections

ionic-dipole
interactions

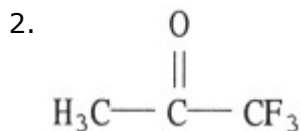
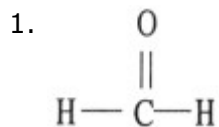
covalent-
ionic
interactions

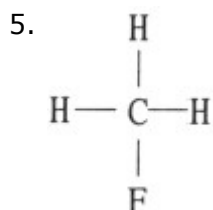
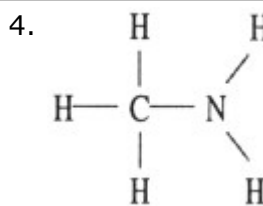
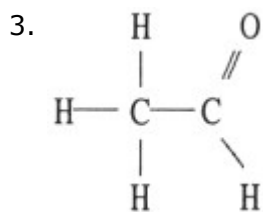
dipole-
dipole
attractions

2.

Which one of the following substances will have hydrogen bonding as one of its intermolecular forces?

Student Response





3-7 VAPOR PRESSURE & PHASE DIAGRAMS

3.

Given below are the temperature at which two different liquid compounds with the same empirical formula have a vapor pressure of 400 torr.

Compound	T (°C)
dimethyl ether, CH ₃ -O-CH ₃	-37.8
ethanol, CH ₃ CH ₂ OH	63.5

Which of the following statements is false?

Student Response

- a. Increasing the temperature will increase the vapor pressure of both liquids.
-
- b. Intermolecular attractive forces are stronger in (liquid)
-

ethanol than
in (liquid)
dimethyl
ether.

c. The normal
boiling point
of dimethyl
ether will be
higher than
the normal
boiling point
of ethanol.

d. The reason
that the
temperature
at which the
vapor
pressure is
400 torr is
higher for
ethanol (than
for dimethyl
ether) is that
there is strong
hydrogen
bonding in
ethanol.

e. None of these
is false.

4.

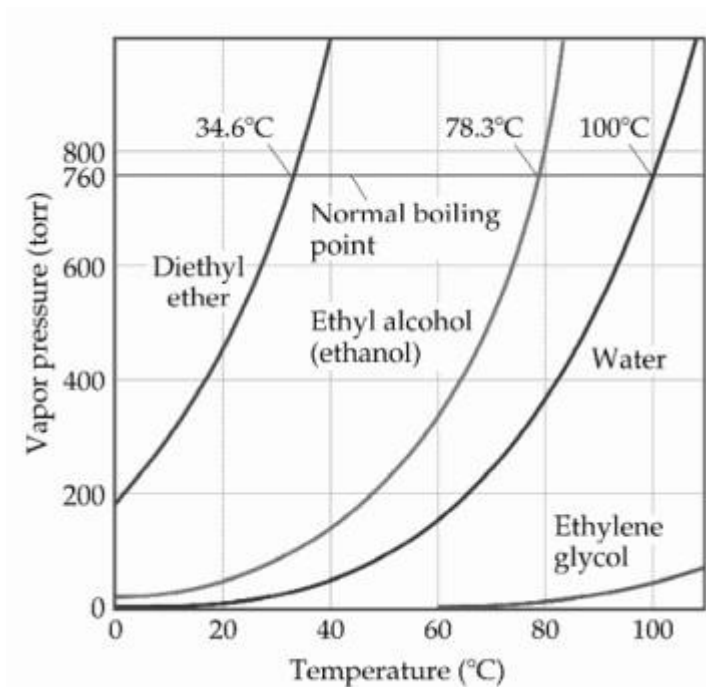
Based on molecular mass and dipole moment of the five compounds in the table below, which should have the highest boiling point?

Substance	Molecular Mass (amu)	Dipole Moment (D)
Propane, $\text{CH}_3\text{CH}_2\text{CH}_3$	44	0.1
Dimethylether, CH_3OCH_3	46	1.3
Methylchloride, CH_3Cl	50	1.9
Acetaldehyde, CH_3CHO	44	2.7
Acetonitrile, CH_3CN	41	3.9

Student

Response
1. $\text{CH}_3\text{CH}_2\text{CH}_3$
2. CH_3OCH_3
3. CH_3Cl
4. CH_3CHO
5. CH_3CN

5.



Based on the figure above, the boiling point of water under an external pressure of 0.316 atm is

Student Response
a. 70
b. 40
c. 60
d. 80
e. 90

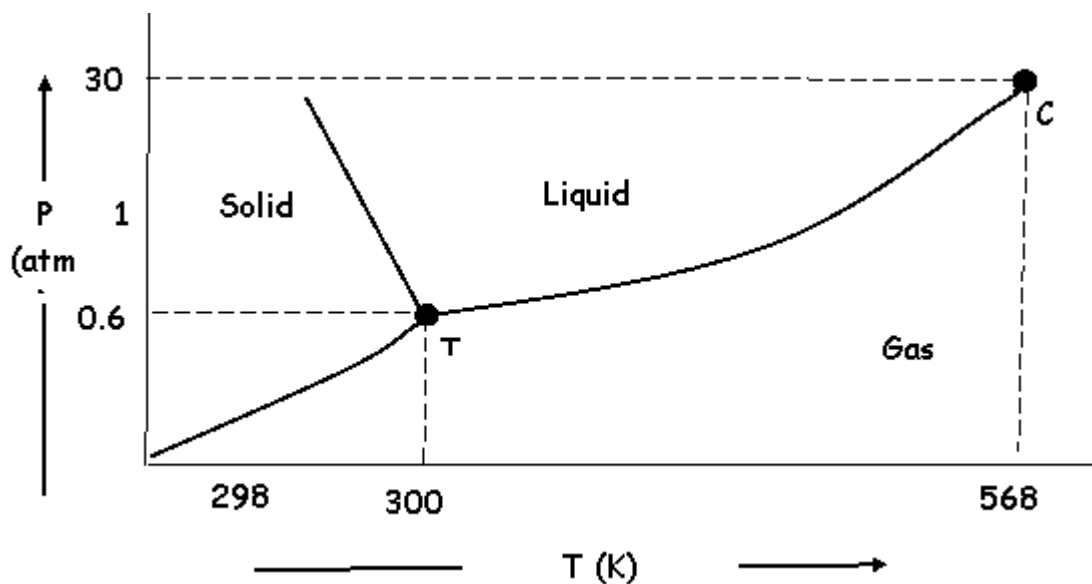
6.

A certain liquid has a vapor pressure of 341 torr at 246 K and a vapor pressure of 503 torr at 614 K. What ΔH_{vap} for this liquid.

Answer

7.

Consider the following phase diagram for substance X



1. Under normal atmospheric conditions (298K, 1 atm) will substance X exist as a solid, liquid, or gas?
2. If heat is applied to the solid, will it melt or sublime?
3. Which is more dense, the solid or the liquid?
4. Point C is the critical point. Provide a clear definition of this.

8-8 LIQUID PROPERTIES

8.

Explain why water sheets on an unwaxed metal car hood but beads up on a waxed car hood in terms of the cohesive and adhesive forces involved. (Note wax is nonpolar). Does this involve surface tension, capillary action, or viscosity?

9-12 SOLUTION FORMATION & SOLUBILITY

9.

Which of the following would be most soluble in benzene, C_6H_6 ?

Student
Response

a. C_8H_{18}
(octane)

b. H_2O

c. CH_3CH_2OH
(ethanol)

d. NH_3
(ammonia)

e. $NaCl$

Score: 5/5

10.

When a bottle of champagne is opened the cork often pops out with such force that it can fly across the room. Considering that pressure of CO_2 above the liquid in the

unopened bottle is about 2.8 atm and the partial pressure of CO₂ in the atmosphere is about 0.15 atm, explain what causes the cork to launch when the bottle is opened.

Student Response:

11.

There is an old saying "oil and water don't mix." Given that oil is a mixture of nonpolar hydrocarbons. Explain in terms of the cohesive and adhesive forces involved, why oil and water are immiscible. Clearly identify the cohesive and adhesive forces involved

Student Response:

12.

Gas X has a solubility of 2.48 g/L at a pressure of 3.564 atm. What will the solubility of gas X be at a pressure of 3.703 atm?

13-14 CONC UNITS

13.

A 42.7% (mass/mass) solution of compound Buba {FW = 202} has a density of 0.363 g/mL. What is the molarity of this solution?

14.

If 33.6 mL of a 7.8 solution is diluted to a total volume of 746 mL, what is the molarity of the resulting diluted solution?

15-20 COLLIGATIVE PROPERTIES

15.



When sucrose (a non volatile, non electrolytic) solute is dissolved in water it causes.

1. The vapor pressure of the water to decrease
2. The boiling point of water to increase
3. The freezing point of water to decrease.

Explain in sufficient detail why this occurs. These solution properties are called colligative properties. What exactly does this mean?

16.

Determine the mole fraction of solvent in a solution that has a vapor pressure of 174 mmHg at at temperature of 20.6°C. (The vapor pressure of the pure solvent is 717 at this temperature. Assume the solute is nonvolatile)



17.

Two volatile liquids A and B are mixed together to form a miscible solution. If the vapor pressures of pure A and B are respectively 154.4 mmHg and 105.6 mmHg, and the mole fraction of B (liquid phase) is 0.40, what is the vapor pressure of this solution (in mmHg)

18.

Liquid A and liquid B form a solution that behaves ideally according to Raoult's law. The vapor pressure of pure substances A and B are 426 mmHg and 327 mmHg. If the mole fraction of liquid A in a particular solution is 0.42, what is the mole fraction of A in the vapor phase in equilibrium with that solution?

19.

When 31.3-g sample of an unknown solute is dissolved in 507-g of solvent, the boiling point increases by 2.98°. Given that the molal boiling point constant for the solvent is $K_b = 2.59^\circ\text{C}/m$, calculate the molar mass of the unknown solute.

20.

Calculate the osmotic pressure (**in mmHg**) at 43.9 °C for a 0.46 molar electrolytic solution with a Van't Hoff factor of $i=3.0$

