

alternate electrons (Homework)

For help with these problems

www.tutor-homework.com

Be sure to mention the filename:

Chemistry_Questions_0125

www.tutor-homework.com (for tutoring, homework help, or help with online classes)

1.

How many valence electrons are found in an atom of Cl?

2.

How are the 3s and 4s sublevels of an atom different?

3.

What orbital characteristic is indicated by the magnetic quantum number?

4.

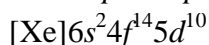
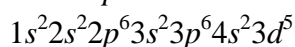
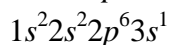
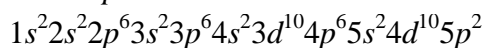
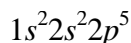
The shape of an orbital is indicated by what quantum number?

5.

How many orbitals are contained in the 4p sublevel?

6.

Enter the symbol for the element represented by each of the following ground state configurations for the neutral atom.



7.

Which of the following is a correct orbital notation for a ground state silicon atom? (Select all that apply.)

8.

What is the correct arrangement of the electron spins in a $3d^4$ sublevel? (Select all that apply.)

9.

In which group of the Periodic Table do the elements have an electron configuration which ends with the following sublevel notations? Type your answers using the group numbers 1 - 18.



p^6
 s^2
 p^1
 p^4

10.

What is the electron configuration of each of the following elements? Use the noble gas abbreviation of the configuration. Enter the sublevels in the order in which they are filled. For example, type your answer using the format [Ar]4s² 3d¹⁰ 4p² for [Ar]4s²3d¹⁰4p².

Li
S
Ca
Co
I

11.

What is the electron configuration of each of the following elements? Use the noble gas abbreviation of the configuration. Enter the sublevels in the order in which they are filled. For example, type your answer using the format [Ar]4s² 3d¹⁰ 4p² for [Ar]4s²3d¹⁰4p².

Ga
In
Sc
Na
Cs

12.

How many unpaired electrons are present in each of the following elements? Enter your answers as numerals.

Al
V
K
As
Ba

13.

Identify the elements having the electron configurations below. Write the symbol for the element. You may use the Periodic Table.

[Ne]3s²3p²
[Ar]4s²3d⁸
1s²2s²2p⁶3s²3p⁶4s²3d²
1s²2s²2p⁶3s²3p⁶4s²3d¹⁰4p⁶